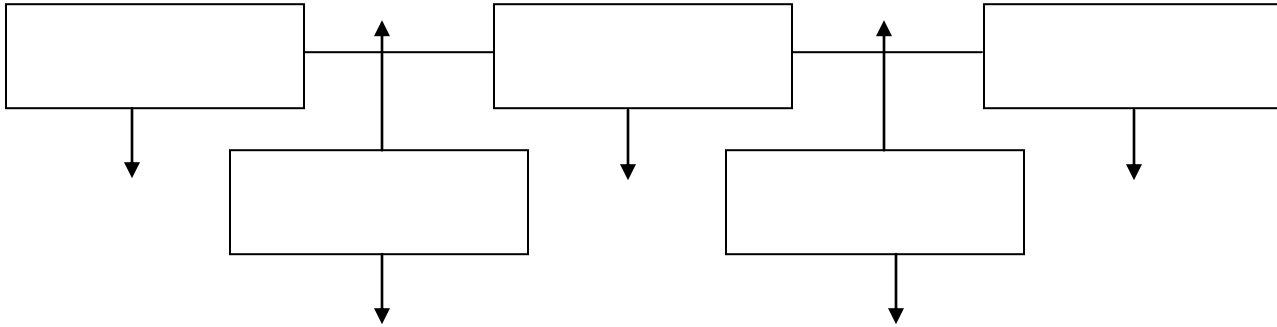


Social Studies Blog Worksheet 2

Grade 3

Name _____ Class _____ Date _____

Q1: Draw a timeline for your last weekend telling about routine:



Q2: Fill in the blanks:

- Sequence of events written on a line is called _____.
- It's easy to find a place on the map through _____.
- Imaginary lines from North to South poles are called _____.
- We must wear _____ and tidy uniform.
- _____ is a list of symbols.

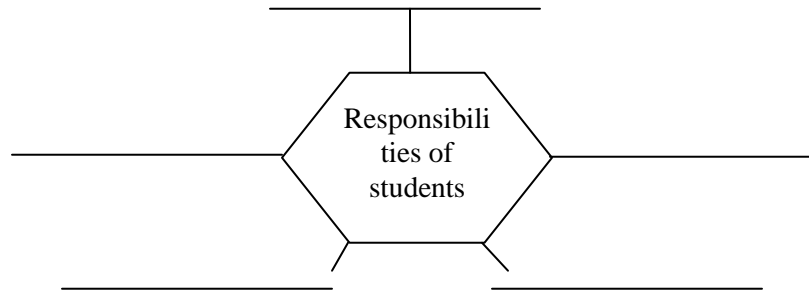
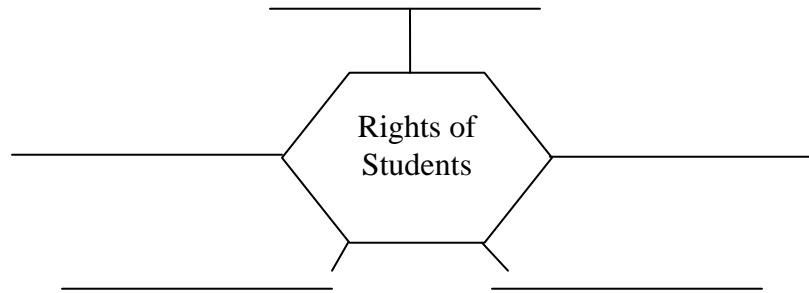
Q3: Match Column A with Column B:

Festivals	Dates
a. Eid-ul-Fitr	12 th Rabi-ul-Awal
b. Eid-ul-Azha	Novmeber
c. Eid-e-Milad-un-Nabi	1 st Shawal
d. Iqbal day	25 th December
e. Birthday of Quaid-e-Azam	10 th Zilhaj
f. Christmas	9 th November
g. Easter	March 21 st
h. Diwali	25 th December
i. Nauroz	Mid Sunday

Q4: Write any four courtesy words:

- a.
- b.
- c.
- d.

Q5: Complete the webs enlisting the rights of students at school:



Q6. Write the names of 3 Islamiat festivals. Which Muslims celebrate all over the world.

- a. _____
- b. _____
- c. _____