

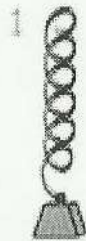


Science Worksheet (~~Magnet~~) *Spring*

Look at these 3 springs below. Why is spring 2 the longest?
Give your reasons below:



Describe what happens to a the spring in a Jack in the Box when the lid is closed:
