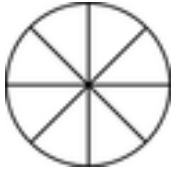


Equivalent fractions

Grade 4 Fractions Worksheet

Write in the missing fraction and color in the pie charts.

1)

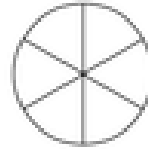


$$\frac{2}{8}$$

=

—

2)



$$\frac{4}{6}$$

=

—

3)



$$\frac{1}{4}$$

=

—

4)

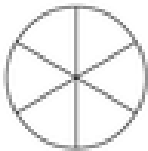


$$\frac{1}{8}$$

=

—

5)



$$\frac{2}{6}$$

=

—

6)



$$\frac{5}{8}$$

=

—

7)



$$\frac{2}{16}$$

=

—

8)



$$\frac{4}{8}$$

=

—

Answers

