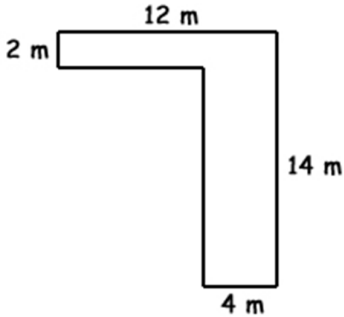


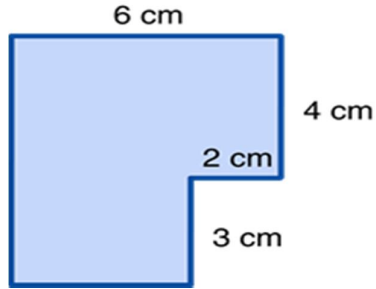


Math Worksheet 2013

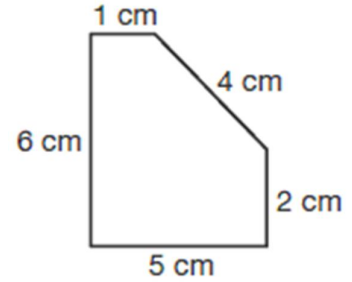
Q1. Find the perimeter of the following shapes:



_____m

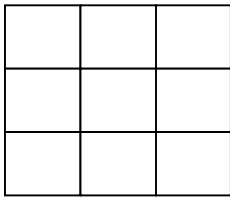


_____cm

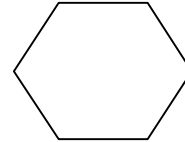
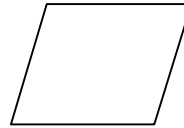
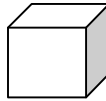

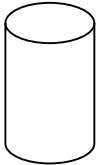


_____cm

Q2. How many squares can you identify in this picture:



Q3. Name the shapes:



Q4. Complete the given chart:

3D Shapes	Flat Faces	Curved faces	Vertices	Edges
Triangular Prism				
Cylinder				
Cube				
Cone				

Q5. Draw the following shapes:

Pentagon

Hexagon

Octagon

nonagon

Decagon