

4 Write in seconds.

(a) 4 min = s

(b) 6 min = s

(c) 5 min = s

(d) 8 min = s

5 Write in minutes.

(a) 120 s = min

(b) 240 s = min

(c) 300 s = min

(d) 420 s = min

6 Write in seconds.

(a) 2 min 15 s = s

(b) 3 min 40 s = s

(c) 4 min 50 s = s

(d) 5 min 20 s = s

7 Write in minutes and seconds.

(a) 80 s = min s

(b) 130 s = min s


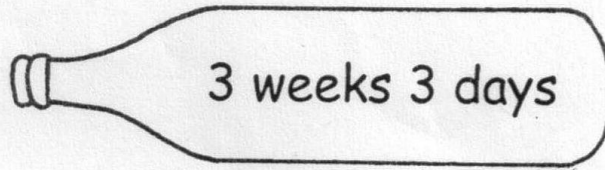

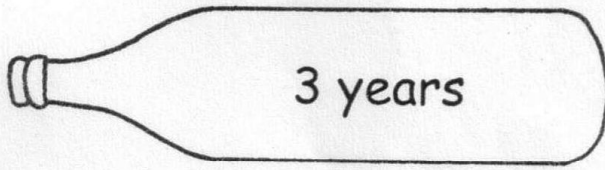



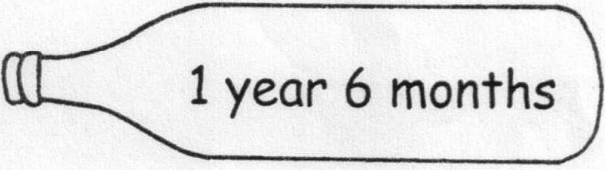

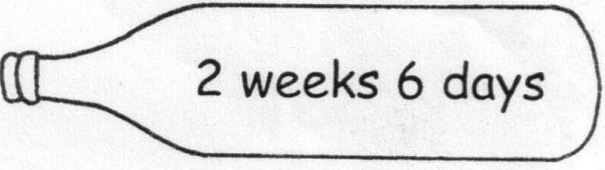



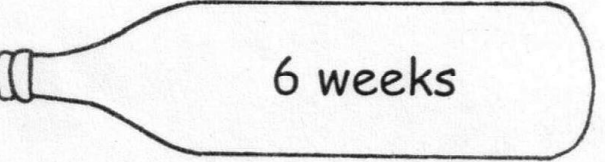
(c) 200 s = min s

(d) 270 s = min s

(e) 320 s = min s

Worksheet Other units of time


1 Match.

 11 days	•	•	 3 weeks 3 days
 20 days	•	•	 3 years
 24 days	•	•	 1 week 4 days
 42 days	•	•	 1 year 6 months
 18 months	•	•	 2 weeks 6 days
 36 months	•	•	 4 years 10 months
 58 months	•	•	 6 weeks




● Match.


250 s




2 min




1 min 40 s




3 h



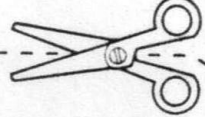
2 h 10 min



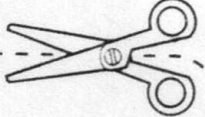
240 min



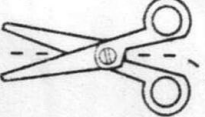
100 s



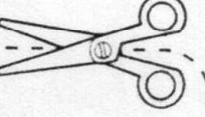
130 min



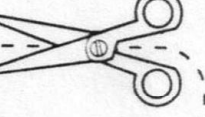
4 min 10 s



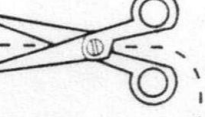
4 h



120 s



180 min





Fill in the boxes with the correct answers.

START

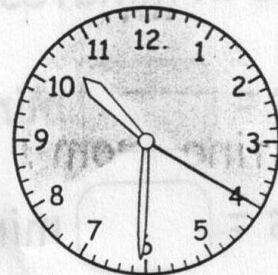
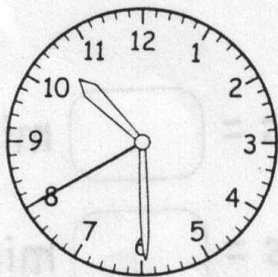
FINISH

(a)



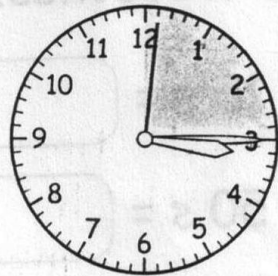

The second hand has moved seconds.

(b)





The second hand has moved seconds.

(c)



The minute hand has moved minutes.

(d)



The minute hand has moved minutes.