

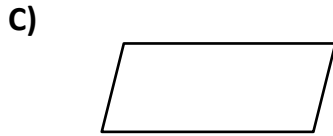
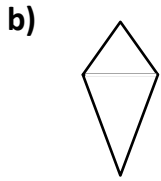


Math CRP-4

Q1: How many lines of symmetry does the shape have?



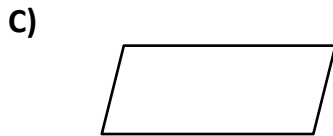
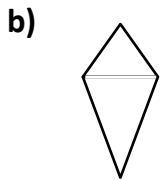
a) Regular Octagon



Math CRP-4

Q1: How many lines of symmetry does the shape have?

a) Regular Octagon



Math CRP-4

Q1: How many lines of symmetry does the shape have?

a) Regular Octagon

