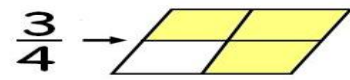
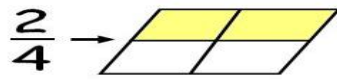
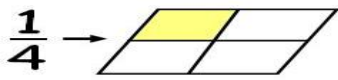
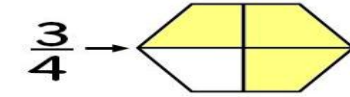
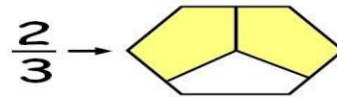
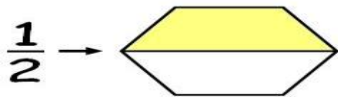


# Math Blog Worksheet- Year 4

## Like Fractions



## Unlike Fractions



Student Name: \_\_\_\_\_

Score: \_\_\_\_\_

Circle the Like Fractions Pair

$\frac{1}{5}, \frac{2}{5}$	$\frac{3}{4}, \frac{4}{5}$	$\frac{2}{7}, 1\frac{3}{7}$
$\frac{4}{3}, \frac{2}{7}$	$\frac{1}{4}, \frac{1}{2}$	$\frac{8}{9}, \frac{11}{9}$
$\frac{2}{3}, \frac{1}{2}$	$3\frac{5}{6}, 2\frac{1}{6}$	$\frac{1}{5}, \frac{2}{6}$
$5\frac{2}{3}, \frac{11}{3}$	$2\frac{3}{8}, 2\frac{3}{5}$	$\frac{6}{7}, \frac{3}{7}$
$\frac{5}{13}, \frac{9}{12}$	$\frac{5}{4}, 2\frac{1}{4}$	$9\frac{1}{2}, \frac{4}{9}$
$\frac{6}{5}, \frac{9}{5}$	$2\frac{5}{8}, \frac{3}{8}$	$\frac{9}{11}, \frac{2}{9}$
$\frac{7}{6}, \frac{1}{3}$	$\frac{1}{8}, \frac{1}{9}$	$\frac{4}{8}, \frac{8}{9}$

Student Name: \_\_\_\_\_

Score: \_\_\_\_\_

Answer key

Circle the Like Fractions Pair

$\frac{1}{5}, \frac{2}{5}$	$\frac{3}{4}, \frac{4}{5}$	$\frac{2}{7}, 1\frac{3}{7}$
$\frac{4}{3}, \frac{2}{7}$	$\frac{1}{4}, \frac{1}{2}$	$\frac{8}{9}, \frac{11}{9}$
$\frac{2}{3}, \frac{1}{2}$	$3\frac{5}{6}, 2\frac{1}{6}$	$\frac{1}{5}, \frac{2}{6}$
$5\frac{2}{3}, \frac{11}{3}$	$2\frac{3}{8}, 2\frac{3}{5}$	$\frac{6}{7}, \frac{3}{7}$
$\frac{5}{13}, \frac{9}{12}$	$\frac{5}{4}, 2\frac{1}{4}$	$9\frac{1}{2}, \frac{4}{9}$
$\frac{6}{5}, \frac{9}{5}$	$2\frac{5}{8}, \frac{3}{8}$	$\frac{9}{11}, \frac{2}{9}$
$\frac{7}{6}, \frac{1}{3}$	$\frac{1}{8}, \frac{1}{9}$	$\frac{4}{9}, \frac{8}{9}$