


Math Blog Worksheet- Year 4

Name: _____ Class: _____ Section: _____ Date: _____


Perimeter

Q. Find the perimeter of each shape.


Perimeter of a Shape

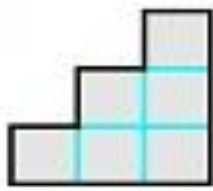


d.

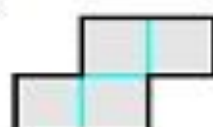


b.

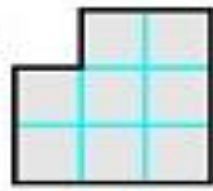




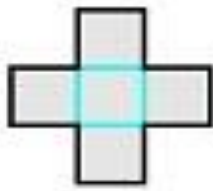
c.



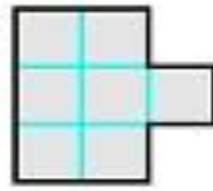
d.



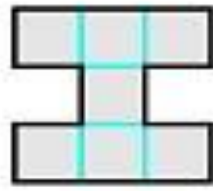
e.



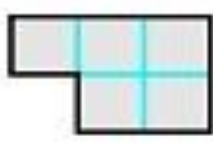
f.



g.



h.



i.

Answer Key

- a. P= 12 cm**
- b. P= 10 cm**
- c. P= 12 cm**
- d. P= 10 cm**
- e. P= 12 cm**
- f. P= 12 cm**
- g. P= 12 cm**
- h. P= 16 cm**
- i. P= 10 cm**