


Math Blog Worksheet – Year 4

Name: _____ Class: _____ Section: _____ Date: _____


Area


Q1. Find the area of the following rectangles.


Area of a Rectangle





To find the area of a rectangle, multiply the length by the ~~breadth~~ width.


example:  area = $4\text{ m} \times 8\text{ m} = 32\text{ square meters}$


a.  area = _____


b.  area = _____


c.  area = _____

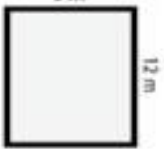
d.  area = _____

e.  area = _____

f.  area = _____

g.  area = _____

h.  area = _____

i.  area = _____

Answer Key

- a) **24 km**
- b) **18 cm**
- c) **30 m**
- d) **7 km**
- e) **33 cm**
- f) **144 cm**
- g) **42 m**
- h) **8 km**
- i) **108 m**