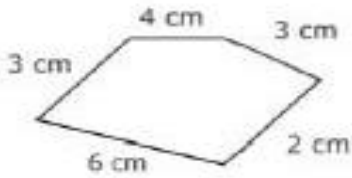


Math Blog Worksheet – Year 4

Name: _____ Class: _____ Section: _____ Date: _____

Perimeter

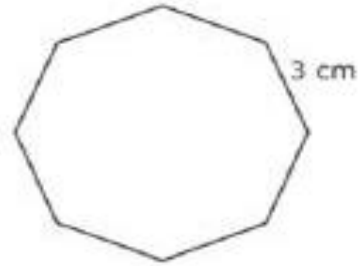
Q1. Find the perimeter of the following shapes by finding the missing side lengths.



1. P = _____




2. p = _____



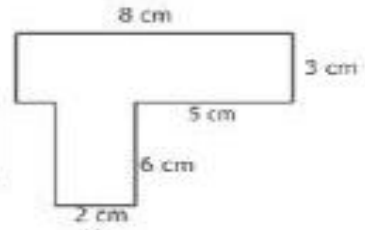
3. P = _____



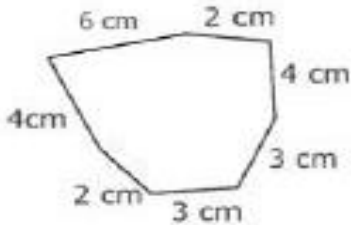
4. P = _____



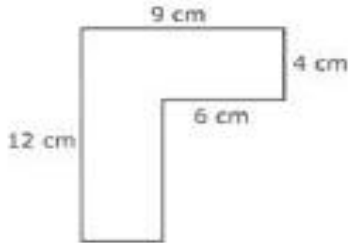
5. P = _____



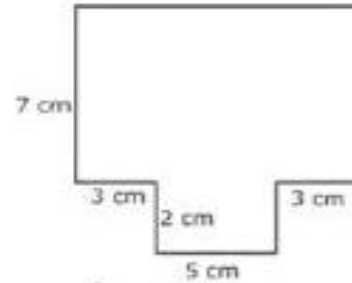
6. P = _____



7. P = _____



8. P = _____



9. P = _____

Answer Key

- 1. 18 cm**
- 2. 18 inches**
- 3. 24 cm**
- 4. 274 mm**
- 5. 34 cm**
- 6. 34 cm**
- 7. 24 cm**
- 8. 42 cm**
- 9. 40 cm**